
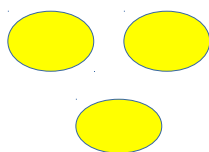




Oblicz. Pomóż sobie rysunkiem.


$3 + 5 =$



$4 + 4 =$



$6 + 3 =$



$5 + 5 =$

**3**

**4**

**5**

**8**

**6**

**7**