

Temat: Procenty i ułamki.

Zadanie 1. Zamień % na ułamki i odwrotnie.

$$8\% = \frac{8}{100} = 0,08$$

$$25\% = \dots\dots\dots = 0,25$$

$$10\% = \frac{10}{100} = \dots\dots\dots$$

$$12\% = \dots\dots\dots = 0,12$$

$$6\% = \dots\dots\dots = 0,06$$

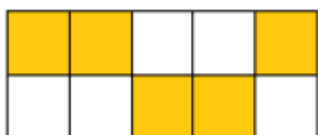
$$33\% = = \dots\dots\dots$$

$$75\% = \frac{75}{100} = \dots\dots\dots$$


$$99\% = \dots\dots\dots = 0,99$$

$$120\% = \dots\dots\dots = 1,2$$

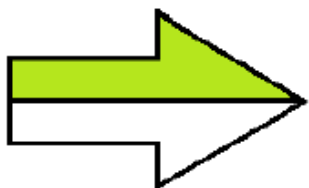
Zadanie 2. Jaki to procent?



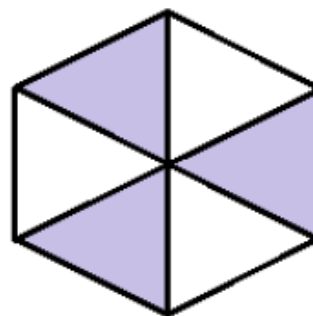
.....%



.....%



.....%



.....%